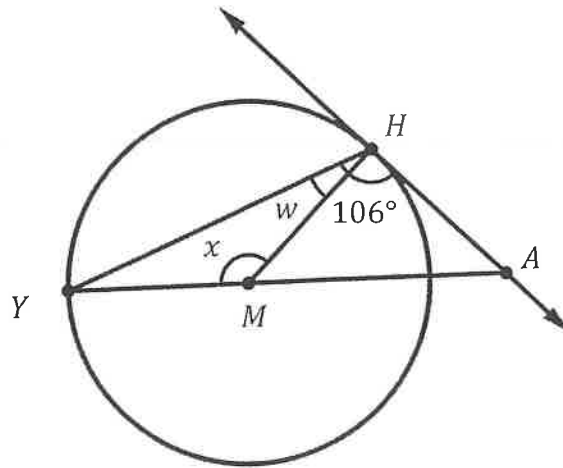


Name \_\_\_\_\_

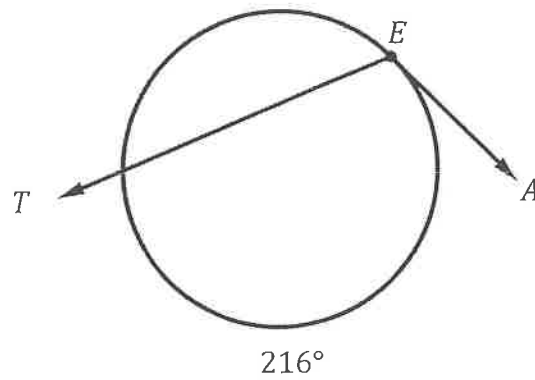
Date \_\_\_\_\_

Circles – Part 2  
Circumscribed Angles and Beyond – Part 1  
Independent Practice

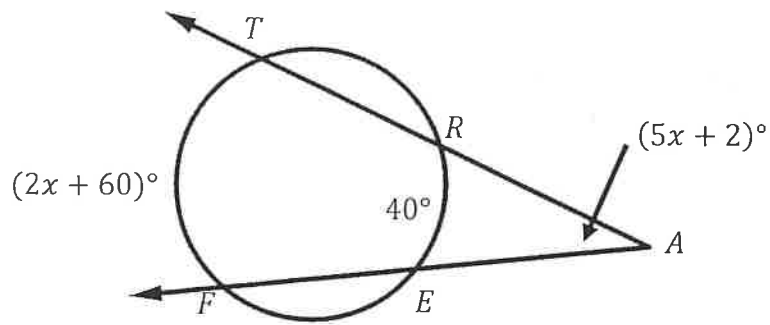
1. Determine the value of  $w$  and  $x$  in circle  $M$  below.



2. Determine  $m\angle TEA$ .



5. Consider the circle below.



Determine the value of  $x$ .

6. Determine the value of  $\angle OMP$ .

